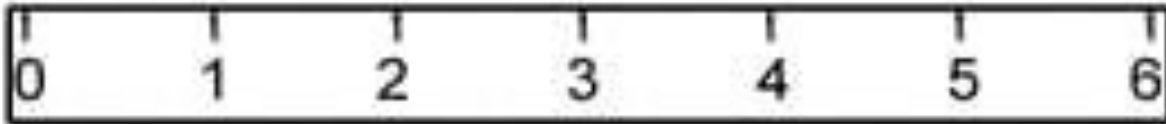


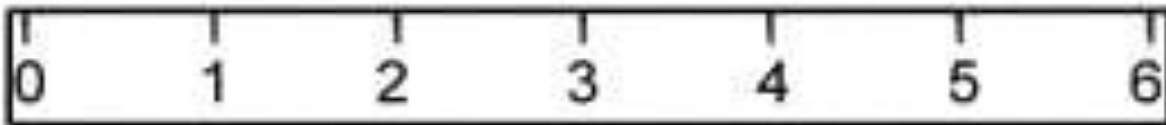
Assignment      Class – I      Subject: Maths      Teacher Name: Mrs. Paramjeet Kaur

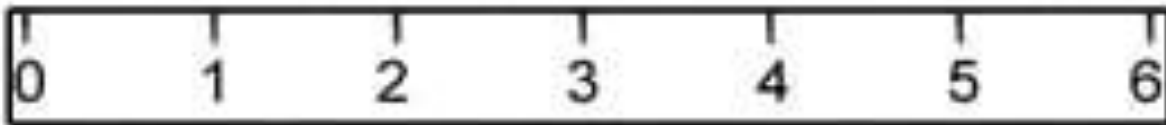
Name \_\_\_\_\_ Class & Sec \_\_\_\_\_ Roll No. \_\_\_\_\_ Date: \_\_\_\_\_

**Q1.** Measure the length of each pencil and write it in the box.













**Q2)** Write the unit g & kg in which you will weigh these.

School bus	Paper clip	Book	Boy
			
<input type="text"/>	<input type="text"/>	<input type="text"/>	<input type="text"/>

**Q3)** Write the unit l / ml in which you will measure these.

A milk carton	A mug	A pitcher
		
<input type="text"/>	<input type="text"/>	<input type="text"/>

Q4) Draw the next shape:

